



**NLCC C.B. Hill # 55  
Ordinary Cadet Review Package**

Worth 5% of Final Grade

Cadet's Name: \_\_\_\_\_ Date: \_\_\_\_\_

<b>Completed</b>	Yes <input type="checkbox"/> No <input type="checkbox"/>
<b>Mark</b>	_____ %



1. Define citizenship:

---

---

---

2. Which of the following cannot become a Canadian citizen? Place a check mark beside all correct answers:

- A person who has knowledge of Canada, including the rights and responsibilities of citizenship.
- A person who has lived in Canada for 2 years immediately preceding an application for citizenship.
- A person that can communicate in French.
- A person who has been convicted of a war crime or a crime against humanity.

3. Canada's Motto – "A Mari usque ad Mare" means:

- (a) From Coast to Coast
- (b) Mountains to Lakes
- (c) From Sea to Sea
- (d) All Under the Queen

4. Which of the following are National symbols of Canada? Place a check mark by the correct answers:

- The Maple Leaf
- The Stanley Cup
- Lacrosse
- The Beaver
- A Mountie in a red tunic
- The Red Ensign
- The National Flag of Canada
- The CN Tower in Toronto
- The letter Z (pronounced "zed", not "zee")
- The Coat of Arms of Canada

5. Name 3 things you can do to become a good citizen:

---

---

---

6. Define the following naval terms:

Galley - \_\_\_\_\_

Port - \_\_\_\_\_

Starboard - \_\_\_\_\_

Aye Aye - \_\_\_\_\_

Colours - \_\_\_\_\_

Sunset - \_\_\_\_\_

Deck - \_\_\_\_\_

Bulkhead - \_\_\_\_\_

Dias - \_\_\_\_\_

Gash Can - \_\_\_\_\_

Bow - \_\_\_\_\_

Stern - \_\_\_\_\_

Pipe Down - \_\_\_\_\_

7. At which time is the Ship's Bell rung vigorously by the XO?

(a) Colors

(b) Sunset

(c) Fire Drill

(d) Stand Easy

8. Write the phonetic alphabet for the following:

C	_____	U	_____
A	_____	X	_____
D	_____	I	_____
E	_____	V	_____
T	_____	J	_____

9. Match the time on the left with the proper **watch** on the right.

0000 to 0400	Afternoon Watch
0400 to 0800	First Watch
0800 to 1200	Middle Watch
1200 to 1600	Last Dog Watch
1600 to 1800	Morning Watch
1800 to 2000	Forenoon Watch
2000 to 0000	First Dog Watch

10. Why are the dog watches done in two 2-hour shifts, instead of the normal 4-hour shifts?

\_\_\_\_\_

\_\_\_\_\_

11. How many bells are to be rung at the following times?

a) 0800 Hours - _____	b) 1130 Hours - _____
c) 1230 Hours - _____	d) 1700 Hours - _____

12. Convert the following times into the 24-hour clock:

Midnight = \_\_\_\_\_ Hours

9:20 am = \_\_\_\_\_ Hours

11:30 pm = \_\_\_\_\_ Hours

8:17 pm = \_\_\_\_\_ Hours

5:00 am = \_\_\_\_\_ Hours

7:35 pm = \_\_\_\_\_ Hours

2:10 am = \_\_\_\_\_ Hours

13. Convert the following times into the 12-hour clock. Also, circle AM or PM:

1200 hours = \_\_\_\_\_ AM / PM

1547 hours = \_\_\_\_\_ AM / PM

0715 hours = \_\_\_\_\_ AM / PM

1738 hours = \_\_\_\_\_ AM / PM

0545 hours = \_\_\_\_\_ AM / PM

0040 hours = \_\_\_\_\_ AM / PM

0320 hours = \_\_\_\_\_ AM / PM

14. Define a ship:

---

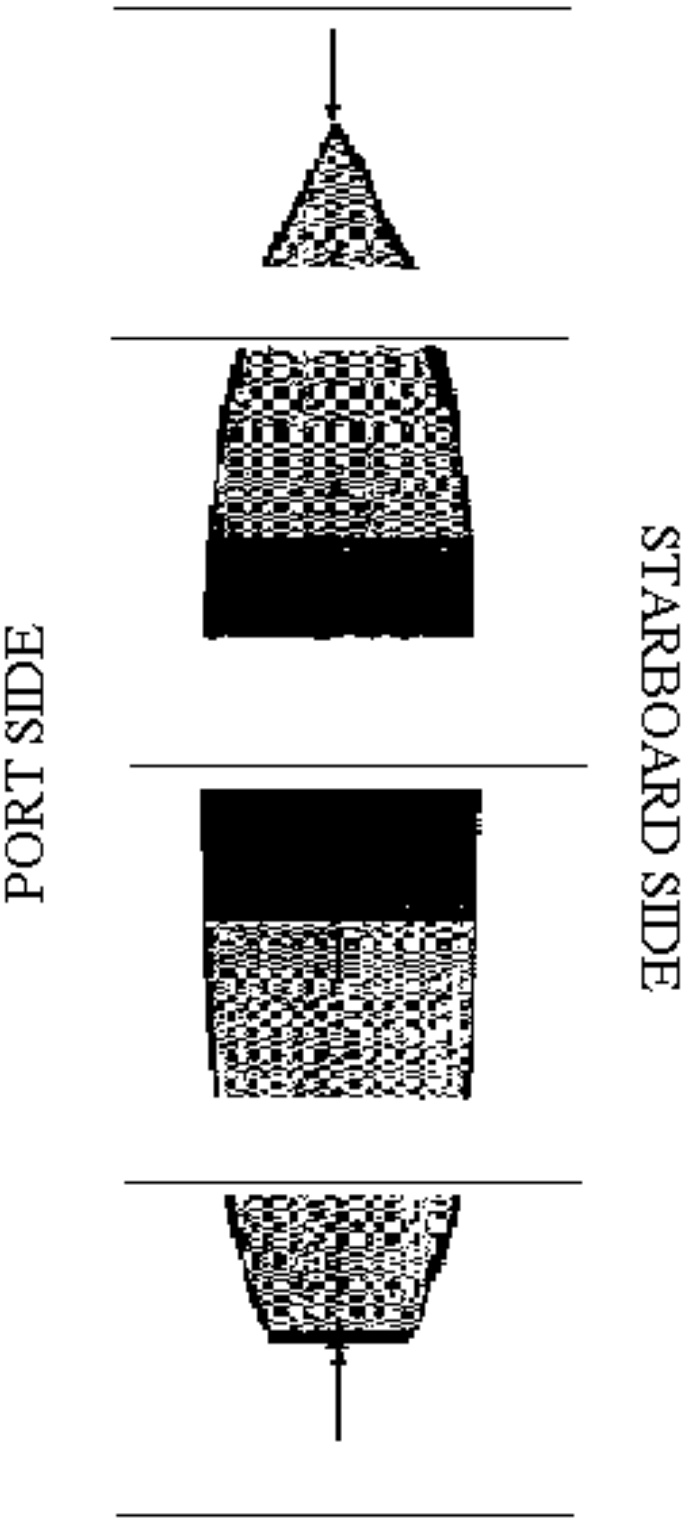
---

15. Which foot is the about turn on the march called on?

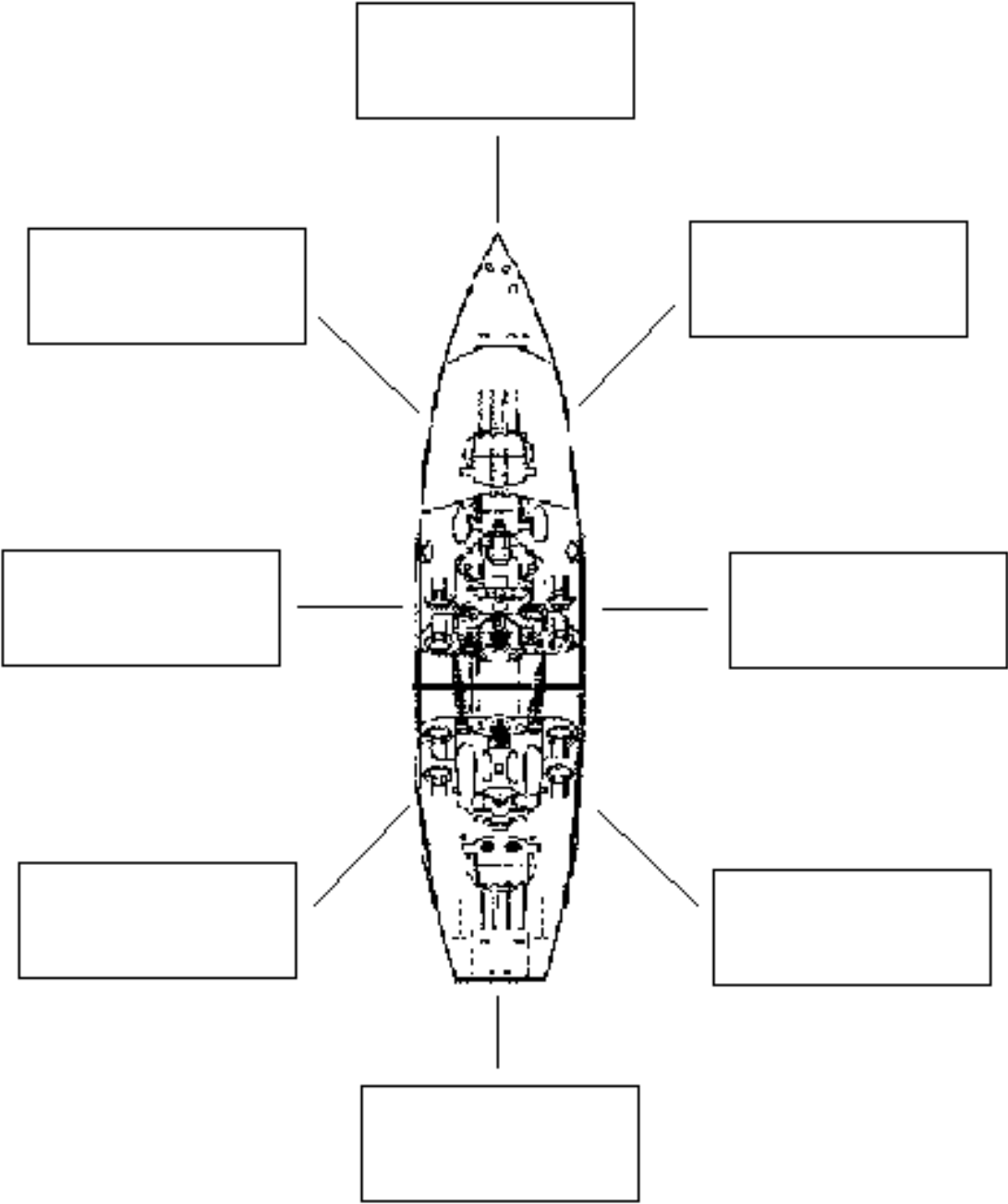
a) Left Foot

b) Right Foot

16. In the diagram below, identify the parts of the ship:



17. In the diagram, identify the directions from a ship:



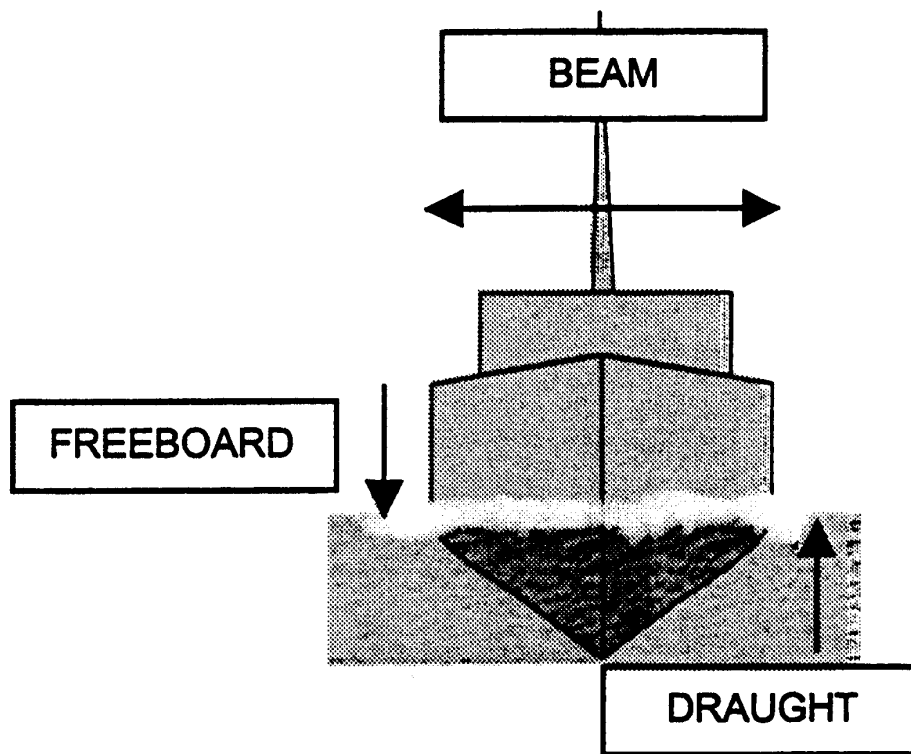


18. Using the diagram below, identify the term on the left with its meaning on the right:

**Beam** Distance between the waterline and the lowest part of the ship's hull.

**Freeboard** The width of a ship from side to side.

**Draught** Distance between the waterline and the highest part of the ship's hull.



19. Tie the following knots:

- Figure-of-Eight
- Reef Knot
- Round Turn and Two Half-Hitch
- Bowline